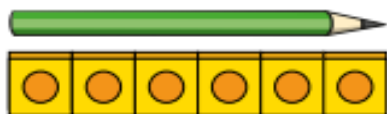


## Yellow

How long is each object?

a)



The pencil is  cubes long.

b)



The chew bar is  cubes long.

d)



The ribbon is  cubes long.

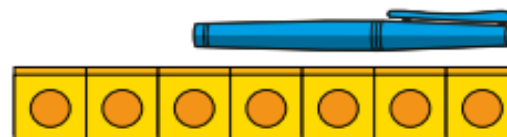
d) Use cubes to measure some objects in your classroom.

## Blue

2



The pen is 7 cubes long.



Do you agree with Rosie? \_\_\_\_\_

Talk about it with a partner.

3

Tommy is measuring objects.



The car and the crayon are the same length.

Do you agree with Tommy? \_\_\_\_\_

## Green

Measure objects in your classroom with these items.

- cubes
- hands
- sticks

Which object is the longest?

Which is the shortest?

How do you know?

## White


How can this 'garage' be fixed to fit the bus in too?



Can you use cubes, building bricks or other 'real objects' to build it?

Is Josie right?

The length of my unicorn is 7 pencils.



Can you give her some top tips?