

Yellow

Blue

 8	$<$	 12
 □		 □
 □		 □
 □		 □
 □		 □
 □		 □
 □		 □
 □		 □

1 a) Draw counters to show the apples.



b) Draw counters to show the children.



c) Complete the sentences.

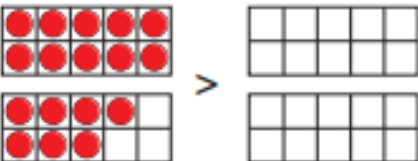
There are apples.

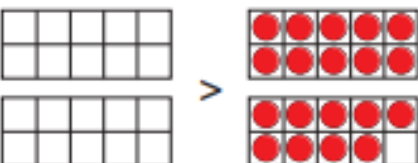
There are children.

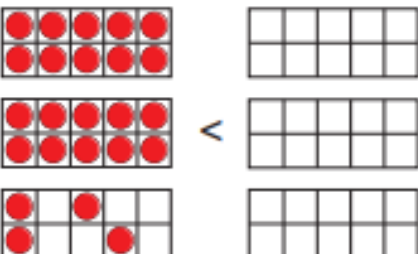
There are fewer _____ than

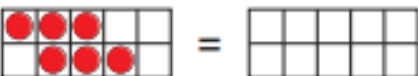
Green

2 Draw counters to make the statements true.

a) 

b) 

c) 

d) 

Is there more than one answer for each?

White

1	2	3	4	5	6	7	8	9	10
11	12	13	14	15	16	17	18	19	20
21	22	23	24	25	26	27	28	29	30
31	32	33	34	35	36	37	38	39	40
41	42	43	44	45	46	47	48	49	50



Fill in the gaps. One has been done.

14	29	32	40	49
is more than		>	is less than	
32 is less than 49				
___ is more than ___				
14 ___ 40				
___ is less than ___				
49 is _____ than 32				
___ > ___				
___ < ___				

