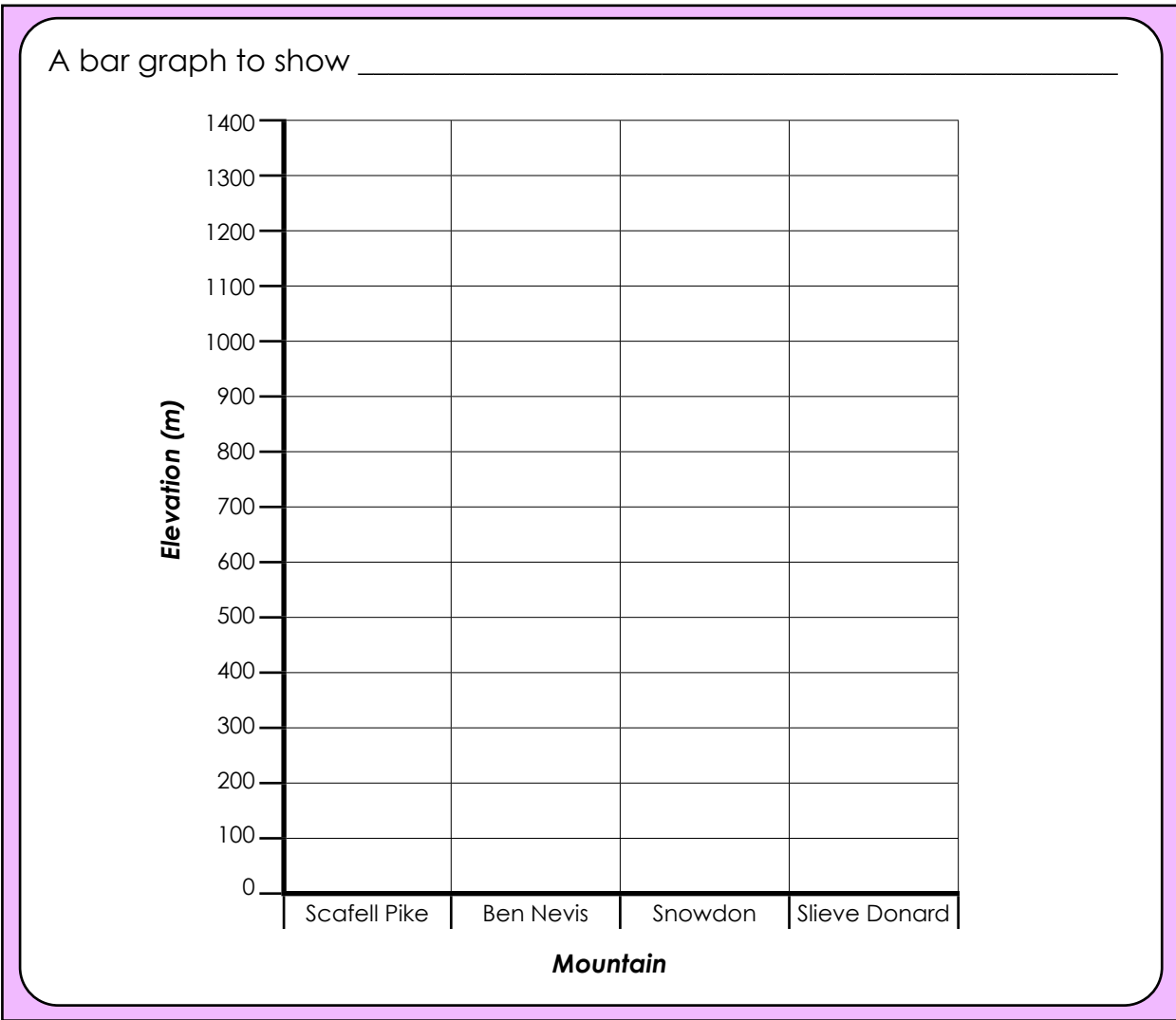


Name: _____ Date: _____

I have gathered some data about the heights of some of the tallest mountains in the UK. Can you put the data into a bar graph and then answer the questions?



Mountain	Scafell Pike	Ben Nevis	Snowdon	Slieve Donard
Country	England	Scotland	Wales	N. Ireland
Elevation (m)	978	1344	1085	850



- a) Which mountain is the tallest? _____
- b) Which mountain is shortest? _____
- c) Put these mountains in order from shortest to tallest:

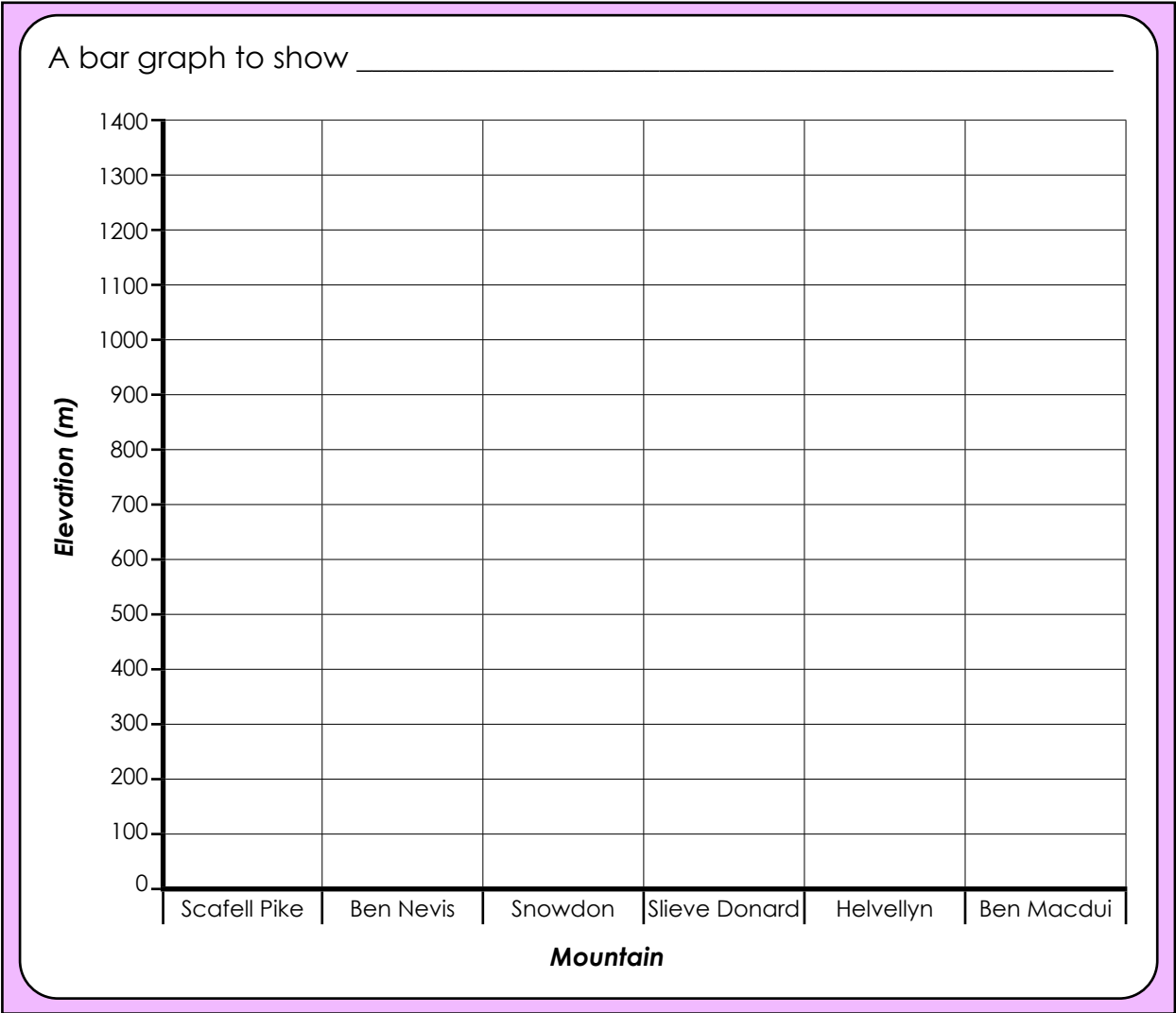
- d) What is the difference in metres between the tallest and shortest mountains?

Name: _____ Date: _____

Fill in the data in this table about these UK mountains and then use the data to create a bar graph and answer the questions.



Mountain	Scafell Pike	Ben Nevis	Snowdon	Slieve Donard	Helvellyn	Ben Macdui
Country						
Elevation (m)						



- a) Which mountain is the tallest? _____
- b) Which mountain is shortest? _____
- c) Put these mountains in order from shortest to tallest:

- d) What is the difference in metres between the tallest and shortest mountains?

Name: _____ Date: _____

This table has the names of some of the tallest mountains in the UK. Complete the table and then create a bar graph to showing the elevation of the mountains on squared paper.



Mountain	Country	Mountain range	Elevation (m)
Scafell Pike			
Ben Nevis			
Snowdon			
Slieve Donard			
Helvellyn			
Ben Macdui			
Skiddaw			
Carnedd Llewelyn			
Braeriach			
Slieve Commedagh			

- a) Which mountain is the tallest? _____
- b) Which mountain is shortest? _____
- c) What is the difference in metres between the tallest and shortest mountains?

- d) Order these mountains from shortest to tallest:

Name: _____ Date: _____

~~My British Mountain Holiday~~

Location:

Travel:

Time of year/season:

Weather:

Activities:

Tourist attractions:

Landscape:

Other notes:

Imagine that you have just been on holiday to one of Britain's beautiful mountain ranges. Write a recount of your holiday, including as much detail as you can.

1. Choose a location

2. Research your location.

3. Write your recount.



Think about...

- What you took with you
- How you got there
- What activities you did there
- What the landscape was like
- How tall the mountains were
- What the weather was like
- Whether you enjoyed it

Imagine that you have just been on holiday to one of Britain's beautiful mountain ranges. Write a recount of your holiday, including as much detail as you can.

1. Choose a location

2. Research your location.

3. Write your recount.



Think about...

- What you took with you
- How you got there
- What activities you did there
- What the landscape was like
- How tall the mountains were
- What the weather was like
- Whether you enjoyed it

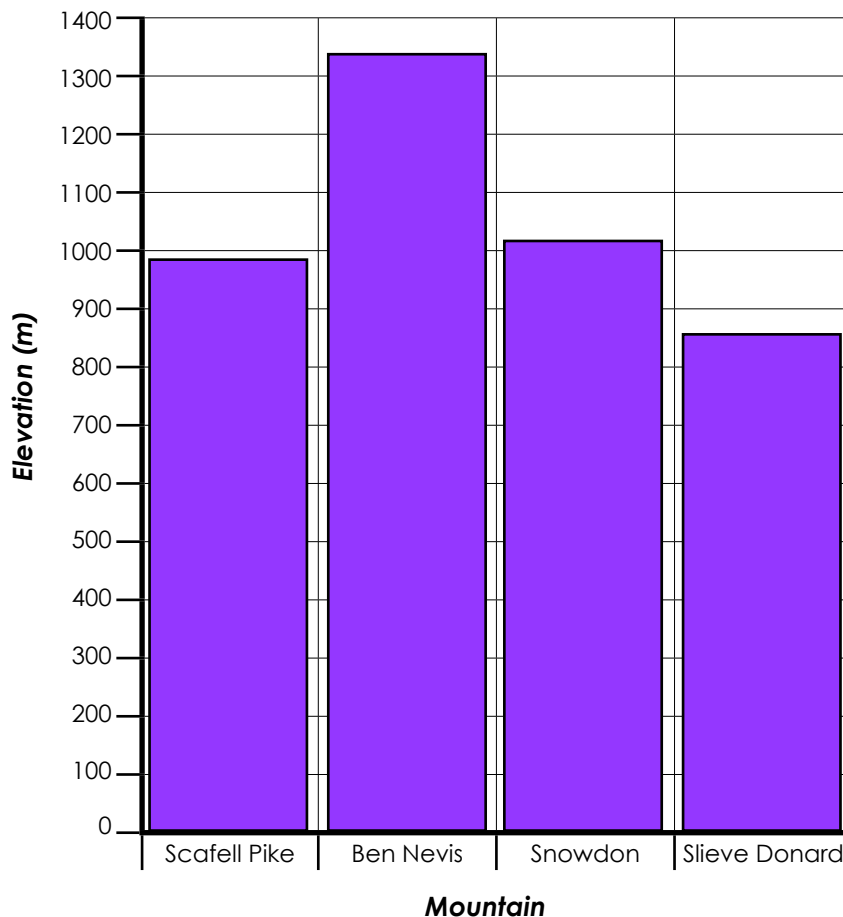
Name: _____ Date: _____

I have gathered some data about the heights of some of the tallest mountains in the UK. Can you put the data into a bar graph and then answer the questions?



Mountain	Scafell Pike	Ben Nevis	Snowdon	Slieve Donard
Country	England	Scotland	Wales	N. Ireland
Elevation (m)	978	1344	1085	850

A bar graph to show _____



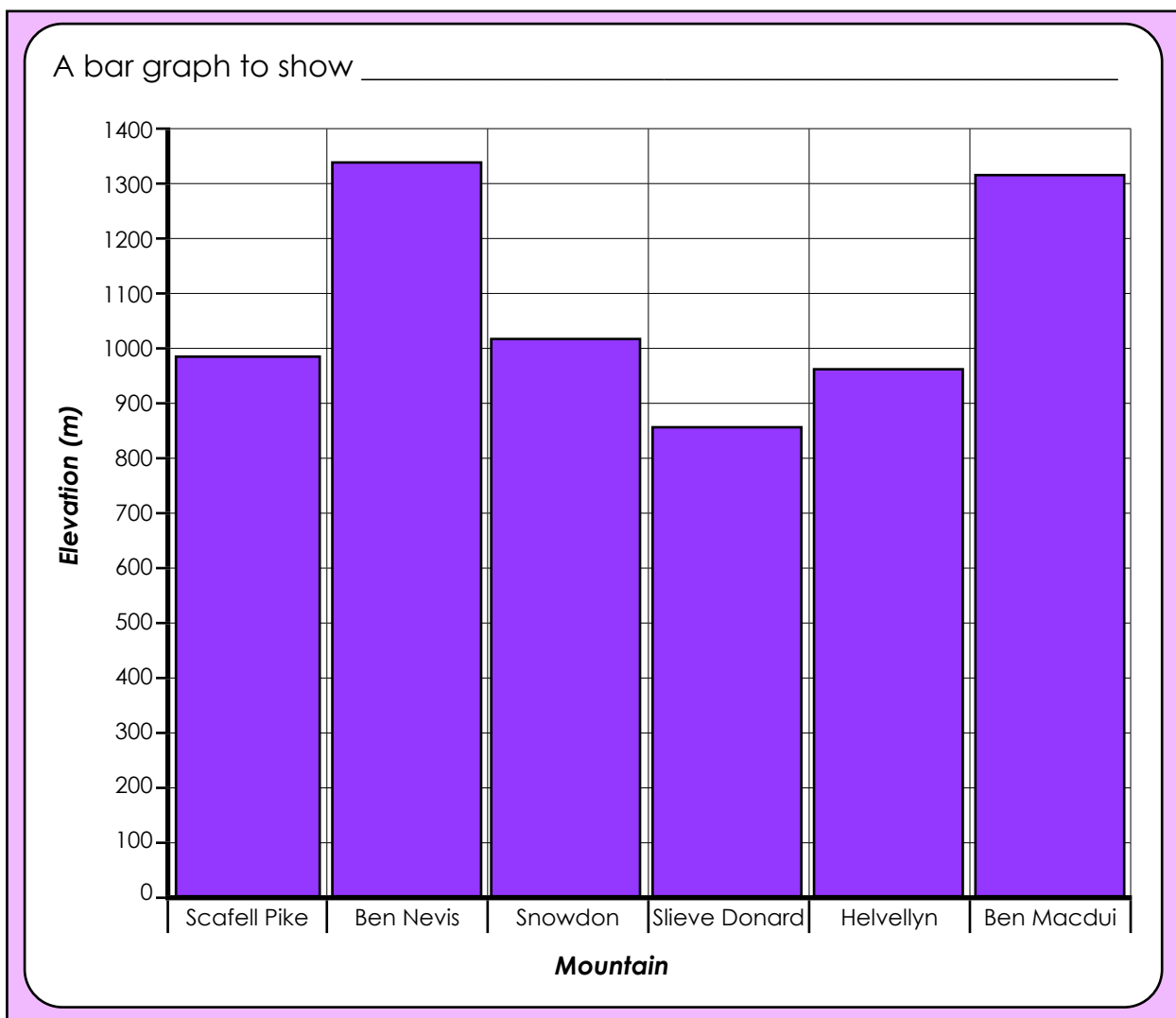
- a) Which mountain is the tallest? **Ben Nevis**
- b) Which mountain is shortest? **Slieve Donard**
- c) Put these mountains in order from shortest to tallest:
Slieve Donard, Scafell Pike, Snowdon, Ben Nevis.
- d) What is the difference in metres between the tallest and shortest mountains?
494 m

Name: _____ Date: _____

Fill in the data in this table about these UK mountains and then use the data to create a bar graph and answer the questions.



Mountain	Scafell Pike	Ben Nevis	Snowdon	Slieve Donard	Helvellyn	Ben Macdui
Country	England	Scotland	Wales	N. Ireland	England	Scotland
Elevation (m)	978	1344	1085	850	950	1309



- a) Which mountain is the tallest? **Ben Nevis**
- b) Which mountain is shortest? **Slieve Donard**
- c) Put these mountains in order from shortest to tallest:
Slieve Donard, Helvellyn, Scafell Pike, Snowdon, Ben Macdui, Ben Nevis.
- d) What is the difference in metres between the tallest and shortest mountains?
494 m

Name: _____ Date: _____

This table has the names of some of the tallest mountains in the UK. Complete the table and then create a bar graph to showing the elevation of the mountains on squared paper.



Mountain	Country	Mountain range	Elevation (m)
Scafell Pike	England	Lake District, Southern Fells	978
Ben Nevis	Scotland	Grampian	1345
Snowdon	Wales	Snowdon Massif	1085
Slieve Donard	Northern Ireland	Mourne	850
Helvellyn	England	Lake District, Eastern Fells	950
Ben Macdui	Scotland	Grampian, Cairngorms	1309
Skiddaw	England	Lake District, Northern Fells	931
Carnedd Llewelyn	Wales	Carneddau	1064
Braeriach	Scotland	Grampian, Cairngorms	1296
Slieve Commedagh	Northern Ireland	Mourne	767

a) Which mountain is the tallest? Ben Nevis

b) Which mountain is shortest? Slieve Commedagh

c) What is the difference in metres between the tallest and shortest mountains?
578 m

d) Order these mountains from shortest to tallest:

Slieve Commedagh, Slieve Donard, Skiddaw, Helvellyn, Scafell Pike, Carnedd Llewelyn, Snowdon, Braeriach, Ben Macdui, Ben Nevis.