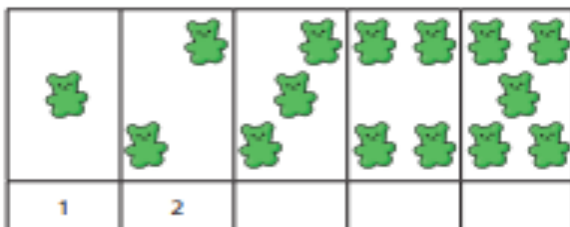


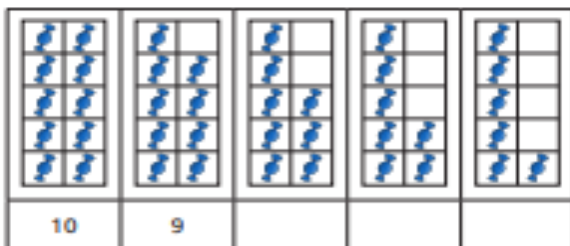
Yellow

1 Complete the number tracks.

a)



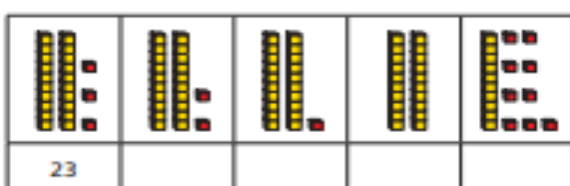
b)



c)



d)



Blue

2 Complete the number tracks.

a)



b)



c)



d)



Green

3 a) Which number comes **before** 14?

b) Which number comes **after** 32?

c) What are the next two numbers **after** 29?

 and

White

Some numbers have been ordered from smallest to greatest.



28		32	39		49
----	--	----	----	--	----



The missing numbers could be 27 and 42.

Sam

The missing numbers could be 30 and 42.



Mo



The missing numbers could be 31 and 44.

Fred

Who is right? _____



Fred

The last number has to have 4 tens.

Is Fred right? How do you know?