



1a. Share 15 oranges equally between 3 children. The first one has been done for you.




How many oranges will each child get?

1b. Share 12 plums equally between 3 children. The first one has been done for you.



How many plums will each child get?

5a. Share 24 apples equally between 3 children.



How many apples will each child get?

5b. Share 18 pears equally between 3 children.



How many pears will each child get?