



# Coins and Notes


I can identify and say the value of notes and coins.



Cut and stick the coins and notes in the right place.

|     |  |
|-----|--|
| 1p  |  |
| 2p  |  |
| 5p  |  |
| 10p |  |
| 20p |  |
| 50p |  |

|   |     |  |
|---|-----|--|
| ★ | £1  |  |
|   | £2  |  |
|   | £5  |  |
|   | £10 |  |
|   | £20 |  |
















# Coins and Notes Answers

I can identify and say the value of notes and coins.



Cut and stick the coins and notes in the right place.

|     |   |
|-----|---|
| 1p  |    |
| 2p  |    |
| 5p  |    |
| 10p |   |
| 20p |  |
| 50p |  |
| £1  |  |
| £2  |  |
| £5  |  |
| £10 |  |
| £20 |  |



# Coins and Notes

I can identify and say the value of notes and coins.



\_\_\_\_\_ p



\_\_\_\_\_ p



£ \_\_\_\_\_



£ \_\_\_\_\_



\_\_\_\_\_ p



£ \_\_\_\_\_



\_\_\_\_\_ p



£ \_\_\_\_\_



£ \_\_\_\_\_



\_\_\_\_\_ p



\_\_\_\_\_ p



# Coins and Notes Answers

I can identify and say the value of notes and coins.



10p



1p



£5



£2



5p



£10



20p



£1



£20



2p



50p



# Coins and Notes

I can identify and say the value of notes and coins.



Write the value of these notes and coins. Don't forget to write pounds (£) or pence (p).











# Coins and Notes Answers

I can identify and say the value of notes and coins.



Write the value of these notes and coins. Don't forget to write pounds (£) or pence (p).

|   |     |
|---|-----|
|    | 10p |
|    | 1p  |
|    | £5  |
|   | £2  |
|  | 5p  |
|  | £10 |
|  | 20p |
|  | £1  |
|  | £20 |
|  | 2p  |
|  | 50p |