









Year 3

Extra Pictogram Challenges
(optional extension)






2a. Answer the questions about the school's favourite sport.


Class	Number of Children
Class 1A	
Class 2A	
Class 3A	
Class 4A	
Class 5A	

Key:  = 5 children

- How many children like football in class 2A?
- How many children like football in Class 4A and Class 5A?
- Which class liked football the most?
- Which two classes liked football the least?






2b. Answer the questions about the children's favourite drink.

Drink	Number of Children
Lemonade	
Cola	
Juice	
Water	
Milk	

Key:  = 10 children

- How many children like juice?
- How many children like cola and milk?
- How many more children like water than lemonade?
- Which two drinks are the most popular?






4a. Answer the questions about the number of cereal boxes sold.

Cereal	Number of Cereal Boxes
Coco Chips	
Sugar Flakes	
Crunchies	
Wheat Bites	
Bran Hoops	

Key:  = 8 cereal boxes sold

- How many boxes of Sugar Flakes were sold?
- How many more boxes of Coco Chips were sold than Crunchies?
- How many boxes of Bran Hoops and Sugar Flakes were sold?
- How many fewer boxes of Wheat Bites were sold compared to Crunchies?






4b. Answer the questions about the number of cupcakes sold in a cafe.

Cupcake	Number of Cupcakes Sold
Carrot	
Lemon	
Chocolate	
Vanilla	
Red velvet	

Key:  = 10 cupcakes sold

- How many chocolate cupcakes were sold?
- How many fewer carrot cupcakes were sold than lemon cupcakes?
- How many red velvet and vanilla cupcakes were sold in total?
- How many more chocolate cupcakes were sold than carrot cupcakes?






6a. Answer the questions about the ice cream treats sold at a tuck shop.

Ice Cream	Number of Items Sold
Sundae	
Bowl	
Sugar cone	
Sandwich	
Wafer cone	

Key:  = 8 sold

- How many sugar cones were sold?
- Which two items were equally sold?
- How many fewer bowls were sold than wafer cones?
- Which items have a difference of 20?

6b. Answer the questions about the stationery sold at a shop.

Stationery	Number of Items Sold
Rubber	
Pencil	
Sticky tape	
Sharpener	
Scissors	

Key:  = 12 sold

- How many sharpeners were sold?
- Which item was sold the most?
- Which items have a difference of 30?
- How many more scissors were sold compared to sticky tape?