

















Green Challenge

 = 2 children
 = 2 children
 = 2 children
 = 2 children
 = 2 children

Class Pets

						
						
						
						
						
Dog	Cat	Fish	Rabbit	Hamster		

Answer the following questions.

1. Which is the most common pet?
2. Which is the least common pet?
3. How many children have a hamster as a pet?
4. How many children have a rabbit as a pet?
5. Which pet do 9 children have?
6. How many more rabbits than dogs are there?
7. How many fewer hamsters than cats are there?
8. How many children have a dog or a fish?
9. How many pets do children in the class have altogether?