



Jake's First Day Time Challenge

Draw the hands on the clocks to show what time Jake did each activity.




At **7 o'clock**, Jake ate his breakfast.



At **10 o'clock**, Jake and his pirate friends found the treasure.




At **half past 8**, Jake said goodbye to Dad and Holly.



At **half past 12**, Jake ate his fish and chips.





At **3 o'clock**, it was home time.




Jake's First Day Time Challenge Answers

Draw the hands on the clocks to show what time Jake did each activity.




At **7 o'clock**, Jake ate his breakfast.




At **half past 8**, Jake said goodbye to Dad and Holly.





At **10 o'clock**, Jake and his pirate friends found the treasure.



At **3 o'clock**, it was home time.





At **half past 12**, Jake ate his fish and chips.




Jake's First Day Time Challenge

Draw the hands on the clocks to show what time Jake did each activity.




At **half past 7**, Jake ate his breakfast.



At **quarter past 10**, Jake and his pirate friends found the treasure.




At **quarter to 9**, Jake said goodbye to Dad and Holly.



At **half past 12**, Jake ate his fish and chips.





At **quarter past 3**, it was home time.




Jake's First Day Time Challenge Answers

Draw the hands on the clocks to show what time Jake did each activity.





At **half past 7**, Jake ate his breakfast.




At **quarter to 9**, Jake said goodbye to Dad and Holly.




At **quarter past 10**, Jake and his pirate friends found the treasure.



At **half past 12**, Jake ate his fish and chips.





At **quarter past 3**, it was home time.




Jake's First Day Time Challenge

Draw the hands on the clocks to show what time Jake did each activity.




At **ten minutes past 8**, Jake ate his breakfast.



At **twenty minutes past 10**, Jake and his pirate friends found the treasure.




At **quarter to 9**, Jake said goodbye to Dad and Holly.



At **twenty-five minutes to 12**, Jake ate his fish and chips.





At **5 minutes past 3**, it was home time.




Jake's First Day Time Challenge Answers

Draw the hands on the clocks to show what time Jake did each activity.






At **ten minutes past 8**, Jake ate his breakfast.




At **quarter to 9**, Jake said goodbye to Dad and Holly.



At **twenty minutes past 10**, Jake and his pirate friends found the treasure.



At **twenty-five minutes to 12**, Jake ate his fish and chips.



At **5 minutes past 3**, it was home time.

