



Write the time shown on this Clock

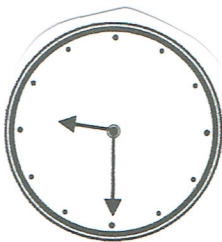


Write the time shown on this Clock




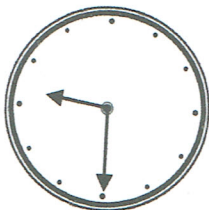
Quarter to 3

Draw the missing hands on the clock so that it shows the correct time written beneath it.



Which of these is the time shown on the clock:

- Quarter past 6
- Quarter past 7
- Quarter to 7



Draw where the hands will be in 15 minutes time.
(Quarter turn) Write what the time was and what it now is.