



Write the time shown on this Clock
It is past



Write the time shown on this Clock
It is to





Quarter to 6

Draw the missing hand on the clock
so that it shows the correct time
written beneath it.



Which of these is the time shown
on the clock:

- Quarter to 12
- Quarter past 11
- Quarter past 12



Draw where the minute hand will
be in 15 minutes time.
(Quarter turn)